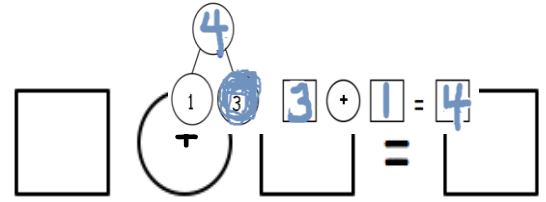


Name _____ Date _____

Color the larger part, and complete the number bond.

Write the number sentence, starting with the larger part.



1.

2. $\square = \square + \square$

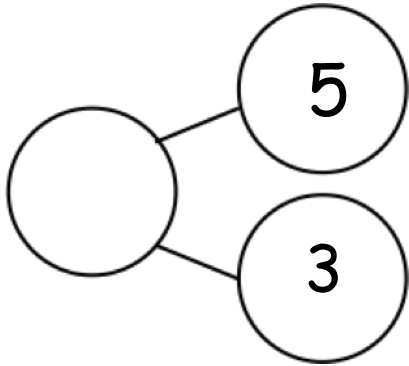
3.

_____ + _____ = _____

4.

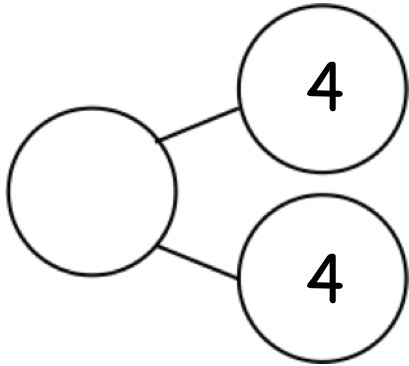
_____ + _____ = _____

5.



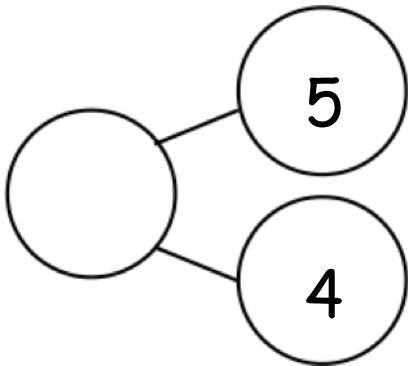
$$\underline{\hspace{2cm}} + \underline{\hspace{2cm}} = \underline{\hspace{2cm}}$$

6.



$$\underline{\hspace{2cm}} + \underline{\hspace{2cm}} = \underline{\hspace{2cm}}$$

7.



$$\underline{\hspace{2cm}} + \underline{\hspace{2cm}} = \underline{\hspace{2cm}}$$